

# INTERNATIONAL TALENT HUNT OLYMPIAD **2019**



iTHO

Organized by:

## Silverzone Foundation

New Delhi-India





FOR SUPREMACY IN SCIENCE &amp; MATHEMATICS

www.silverzone.org





### CLASS 2 SAMPLE QUESTIONS

The actual question paper contains 40 questions. The duration of the test paper is 60 minutes.




1. Find the odd one out.

- (A)  Bun (B)  Egg  
(C)  Bread (D)  Cold drink



2. Identify the cauliflower from the following choices.

- (A)  (B)   
(C)  (D) 

3. Which one of the following is used to make juice?

- (A)  Beans (B)  Maize  
(C)  Orange (D) None of these

4. Which one of the following clothes is essential for winter?

- (A)  Jacket (B)  T-shirt  
(C)  Shirt (D)  Frock

5. Which one of the following parts of a plant supports it to stand on the soil ?





- (A) Stem (B) Leaves  
(C) Fruits (D) All of these

6. How many groups will be formed of the following pencils, if we keep four(4) pencils in each group?



- (A) 3 (B) 5 (C) 2 (D) 6

7. Which one of the following is a plant product?

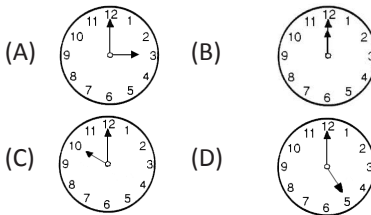
- (A)  Banana (B)  Car  
(C)  Television (D)  Milk

8. Which of the following numbers will come after 15 when numbers inside the box given below are counted in forth counting order?

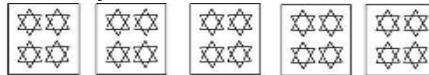
15	13	11
12	14	17
16		

- (A) 16 & 17 (B) 12 & 13  
(C) 13 & 14 (D) Only 11

9. Which one of the following clocks shows the time 5 O' clock?



10. Which one of the following options represents the figure correctly?



- (A)  $10 \times 2 = 20$  (B)  $4 \times 5 = 20$   
(C)  $5 \times 5 = 25$  (D)  $5 \times 3 = 15$

### Answers

- |        |        |        |        |         |
|--------|--------|--------|--------|---------|
| 1. (D) | 2. (C) | 3. (C) | 4. (A) | 5. (A)  |
| 6. (A) | 7. (A) | 8. (A) | 9. (D) | 10. (B) |