



**FLORENCE INTERNATIONAL SCHOOL**  
(Senior Secondary Affiliated With CBSE | ISO 21001:2018 Certified)  
**SUMMER HOLIDAY HOMEWORK (2025-26)**  
**GRADE - I (WORKSHEETS)**

Dear Students, Holidays are an integral part of a student's life.

It is a time for fun, a time to explore are given a meaningful direction, it results in a productive and enjoyable time. Let's use these holidays to pursue some hobbies and apply our minds creatively to learn new thing and to bring a change in the environment, in our own individual way.

***General Instructions for Students:***

- Follow the instruction given carefully with each activity.
- You can take help of the internet, newspapers magazines, encyclopaedia to collect information and pictures.
- Make you activity sheets presentable and attractive.

***A few suggestions for parents:***

- Spend quality time with your children and have fun time together
- Help the children to become independent by giving them responsibilities. Involve them in small household activities.
- Inculcate in them good manners, healthy habits and respect for elders.
- Converse with your children in English.
- Encourage your children to read books to enhance their language skills. Reading will also boost their interpretative skills and provide them valuable literary experience.
- Cultivate sportsmanship by encouraging your children to play various Indoor games.
- Remember that Summer Vacation is the time to relax and enjoy.
- So, spend these holidays creating a nurturing and stimulating environment filled with fun, frolic, learning and education.
- Have a family dinner every day.
- Play board games with your parents and sibling and show them who is the smartest.

- Spend some quality time with an elderly person in the family and ask them to share their childhood days

## SUBJECT - ENGLISH

- Instruction - Maintain a folder for these printable worksheets.
- This worksheet consists of four sections.

Section A Reading

Section B Creative Writing

Section C Grammar

Section D Literature

## WORKSHEET - 1

### SECTION A -Reading

Ques-1 Read the paragraph and answer the questions.

#### A Monkey



This is a monkey. It is a small animal. It likes to eat fruit and nuts. They are omnivores. Monkeys have two legs, two legs and a tail. They are brown. They can climb and swing from trees.

a. What animal is this?

-----


b. What does it like to eat?

-----

c. What can they do?

-----

Ques-2. Look at the picture and circle the word in each row that describes the picture.



- Five, Apple, Bird
- Tree, Grass, Monkey
- Red, Basket, Clouds

## SECTION -B Creative Writing

Ques 3. Write 5 sentences about yourself with help of clues.

Girl, Boy, Six Years, Football, School, Play

1. \_\_\_\_\_.
2. \_\_\_\_\_.
3. \_\_\_\_\_.
4. \_\_\_\_\_.
5. \_\_\_\_\_.

Ques 4. See the picture and write four lines about it.



1. \_\_\_\_\_.
2. \_\_\_\_\_.
3. \_\_\_\_\_.
4. \_\_\_\_\_.

## SECTION - C Grammar

Ques 5. Circle the word formed by the given vowel.

1. A - b a g d n s c m a t f p t
2. E - n t s e t k l m o p e t l
3. U - n m f u n l o p j u g k

Ques 6. How many letters are there in English alphabet ?

\_\_\_\_\_.

Ques 7. How many vowels are there in the English alphabet?



---

Ques 8. Fill in the blanks with a or an or the.

- a. \_\_\_ ant is black.
- b. This is \_\_\_easy question.
- c. I like to eat\_\_\_ apple.
- d. \_\_\_\_Ganga is a river.

Ques 9. Circle the naming words in the given sentence.

- a. The tiger lives in a jungle.
- b. The toy is in the tub.
- c. Mother has a pet cat.
- d. Birds live in nests.

Ques 10. Write the naming words of -

- a. Person - \_\_\_\_\_
- b. Thing - \_\_\_\_\_
- c. Animal - \_\_\_\_\_

### SECTION - D Literature

Ques 11. Answer these questions.

- a. What is a jungle ?

---

- b. What does the poet feel about mice?

---

- c. Which fruit mother eat in the trip?

---

- d. How many songs father sing ?

---

Ques 12. Make sentence

- a. Orange - \_\_\_\_\_

b. Sky - \_\_\_\_\_


c. Lion - \_\_\_\_\_

## English WORKSHEET - 2

### Section A

Q-1. Read the passage and answer the questions:

"My Little Hen"



I have a hen. It is my pet. My pet is white; I like to play with it.

a. My pet is a \_\_\_\_\_.

b. Colour of my pet is \_\_\_\_\_.

c. Do you like to have a pet? \_\_\_\_\_.

d. Do you have a pet? \_\_\_\_\_.

Q-2. Write 5 lines on your favourite Super Hero: a)

b) \_\_\_\_\_

c) \_\_\_\_\_

d) \_\_\_\_\_

e) \_\_\_\_\_

Q-3. Complete the story:

The \_\_\_\_\_ is blue today.  
Lily wants to go outside to  
\_\_\_\_\_. She wants to wear  
a \_\_\_\_\_ and a top. Her  
mother reminds her to  
wear a \_\_\_\_\_ as well. It is  
on the \_\_\_\_\_ in her room.

skate mask sky  
desk skirt



Q-4. See the picture and write 3 lines:



1. \_\_\_\_\_
2. \_\_\_\_\_
3. \_\_\_\_\_

### Section B

Q-1. Fill the missing vowels:

- a) F \_ n
- b) C \_mb
- c) B \_g
- d) T\_g \_r
- e) S\_n
- f) H\_t

Q-2. Write rhyming words:

- a) Bun, Fun, \_\_\_\_
- b) Hat, Bat, \_\_\_\_

Q-3. Fill in the blanks with 'A' or 'An' or 'The':

- a) \_\_\_\_\_elephant is eating grass.
- b) \_\_\_\_\_sky is blue.
- c) \_\_\_\_\_world has many countries.
- d) It is \_\_\_\_bright day.



Q-4. Write the naming words of:

a) Person - \_\_\_\_\_, \_\_\_\_\_

b) Place - \_\_\_\_\_, \_\_\_\_\_

c) Thing - \_\_\_\_\_, \_\_\_\_\_

Q-5. Circle the vowel:

a) Park

b) Child

c) Foot

Q-6. Underline the naming word:

a) Mother goes to the office.

b) Rina is flying a kite.

c) Birds living nest.

### Section C

Q-1. Write meaning of:

a) Camping -\_\_

b) Pegs - \_\_\_\_\_

c) Nibble - \_\_\_\_\_

d) Flew - \_\_\_\_\_

e) Rather - \_\_\_\_\_

Q-2. Make Sentence:

a) Toy - \_\_\_\_\_

b) Mother - \_\_\_\_\_

c) Tiger - \_\_\_\_\_

Q-3. Answer these questions:

a) What type of face does a mouse have?

\_\_\_\_\_

b) Why should people not make a noise in the jungle?

\_\_\_\_\_

c) Where does Benu want to live?



## Class 1 Mathematics Worksheet 1

### Section A: Pre-Number Concepts

1. MCQs - Tick the correct answer:

a. Which is the smallest number? ☐ 9 ☐ 4 ☐ 7

b. Which is the biggest number? ☐ 3 ☐ 6 ☐ 2

2. Match the Following:

Big → ( ) 1

Small → ( ) 8

Tall → ( ) Cat

Short → ( ) Giraffe

3. Circle the odd one out:

5, 9, 2, 11, apple, 7

### Section B: Addition and Subtraction

1. Solve the sums:

a)  $14 + 3 = \underline{\quad}$

b)  $17 - 2 = \underline{\quad}$

c)  $6 + 1 = \underline{\quad}$

d)  $19 - 4 = \underline{\quad}$

2. Fill in the blanks:

a)  $3 + = 5$

b)  $2 = 4$

c)  $2 + 5 =$

d)  $3 = 2$

3. Put the correct sign ( $>$ ,  $<$ ,  $=$ ):

a)  $5 \quad 2$

b)  $3 + 2 \quad 4 + 1$



c)  $79 - 1$

d)  $6 - 22 + 1$

### Section C: Ascending and Descending Order

1. Arrange in ascending order:

6, 2, 9, 4

2. Arrange in descending order:

8, 1, 5, 3

### Section D: Number Patterns and Missing Numbers

1. Follow the pattern:

a) 2, 4, 6, \_\_, \_

b) 10, 9, 8, \_\_, \_\_\_\_

2. Fill the missing numbers:

a) \_\_, 3, 4, , 6

b) 7, \_\_, 5, , 3

### Section E: Tables (Up to 8)

1. Dodging Tables - Fill in the blanks:

a)  $4 \times 2 =$

b)  $7 \times 3 =$

c)  $6 \times = 36$

d)  $5 = 25$

2. Write the tables of 7 and 8

### Section F: Shapes

1. Match the Shapes to their Names:

a)  $\square \rightarrow$  ( ) Circle

b)  $\rightarrow$  ( ) Triangle

c)  $\blacktriangle \rightarrow$  ( ) Square

d)  $\bigcirc \rightarrow$  ( ) Rectangle

2. Draw any four 3D shapes and name it [



## Section G: Mental Maths

1. Solve quickly:

a) How many legs do 2 cats have?

---

b) 5 balloons + 3 balloons =

c) What comes after 19? \_\_

d)  $10 - 4 = ?$  \_\_\_\_ -

## Section H: Word Problems

2. Solve the following:

a) Ria has 3 pencils. She buys 4 more. How many pencils does she have now?

Ans:

b) Tom had 8 candies. He gave 3 to his friend. How many are left?

Ans:

c) There are 5 red apples and 2 green apples. How many apples in total?

Ans:

## Class 1 Mathematics Worksheet 2

Topics: Pre-number Concepts, Addition & Subtraction, Shapes,

Tables up to 8 Name: \_\_\_\_\_ Date: \_\_\_\_\_

## Multiple Choice Questions (MCQs)

1. Which is the biggest number?

a) 12   b) 18   c) 9   d) 15

2. Which shape has 4 equal sides?

a) Circle   b) Triangle   c) Square   d) Rectangle

3. What comes after 17?

a) 18   b) 16   c) 20   d) 19

4. Which number is smaller?

a) 11   b) 7   c) 13   d) 9

5. What is  $8 + 6$ ?

a) 13   b) 14   c) 15   d) 12



## 2. Solve the Answer

1.  $9 + 4 =$

2.  $15 - 6 =$

3.  $7 + 6 =$

4.  $18 - 9 =$

5.  $5 + 8 =$

6.  $16 - 7 =$

7.  $10 + 9 =$

8.  $13 - 4 =$

## 3. Ascending Order

1. 15, 8, 12, 19, 4 =

2. 7, 3, 14, 1, 9 =

## 4. Descending Order

1. 6, 17, 10, 2, 13 =

2. 18, 5, 12, 7, 15 =

## 5. Put the Correct Sign ( $>$ , $<$ , $=$ )

1. 12      9

2. 6      6

3. 8      15

4. 17      11

5. 13      13

## 6. Fill in the Missing Numbers

1. 3, \_\_\_\_, 5, \_\_\_\_, 7

2. \_\_\_\_, 11, \_\_\_\_, 13, \_\_\_\_

3. 19, \_\_\_\_, 17, \_\_\_\_, 15

4. \_\_\_\_, 2, \_\_\_\_, 4, \_\_\_\_

## 7. Dodging Tables



1.  $5 \times 2 =$

2.  $3 \times 4 =$

3.  $7 \times 1 =$

4.  $2 \times 6 =$

5.  $8 \times 2 =$

6.  $4 \times 3 =$

## 8. Shapes Name

1. Shape with 3 sides:

2. Shape that rolls:

3. Shape with 4 equal sides:

4. Shape with no sides:

5. Shape with 4 sides but not all equal:

## 9. Follow the Pattern

1. 2, 4, 6, ,

2. 10, 9, 8, ,

3. 5, 10, 15, ,

4. 1, 3, 6, 10, ,

## 10. Mental Maths

1. What is  $10 + 3$ ?

2. Subtract 6 from 14:

3. Add 7 and 5:

4. What is  $16 - 8$ ?

5. 3 added to 12 is:

## 11. Word Problems

1. Rani has 6 pencils. She buys 7 more. How many pencils does she have in total? Answer:

2. John had 15 apples. He gave 6 to his friend. How many apples are left?



Answer:

3. There are 8 birds on a tree. 4 more come. How many birds now?

Answer:

## 12. Number Line

Mark and solve using a number line (draw a line 0-20):

1.  $6 + 7 =$

2.  $13 - 5 =$

## 13. Critical Thinking Questions

1. Which two numbers give you 17 when added? \_\_\_\_\_ + \_\_\_\_\_ = 17

2. I am greater than 12 but less than 15. Who am I? \_\_\_\_\_

3. Using only table of 2 and 3, which numbers can you make:

\_\_\_\_\_, \_\_\_\_\_, \_\_\_\_\_

4. Draw a shape that has no corners: \_\_\_\_\_

## EVS Worksheet 1

### Multiple Choice Questions (MCQs)

1. We use our legs to:

- a. See                      b. Hear                      c. Walk                      d. Eat

2. We have how many sense organs?

- a. 3                      b. 5                      c. 7                      d. 2

3. We get food from:

- a. Shops                      b. Trees and animals                      c. Clouds                      d. Books

4. Who helps us in our family?

- a. Friends                      b. Neighbors                      c. Family members                      d. Strangers

5. The tongue helps us to:

- a. See                      b. Smell                      c. Taste                      d. Hear

1. Fill in the blanks

a. We see with our .

b. Father and mother are our .

c. Milk comes from a .



d. We should always        each other.

e. The nose helps us to        .

## 2. True or False

a. The eyes help us to smell.

b. A teacher helps us in school.

c. We taste food with our tongue.

d. Junk food is healthy for us.

e. A family does not help each other.

## 3. Match the Following

A	B
Nose	Smell
Eyes	See
Tongue	Taste
Ears	Hear
Family	Help and love

## 4. Missing Letters

a. N \_ \_ E (helps us smell)

b. F \_ \_ D (we eat this)

c. F \_ \_ I \_ Y (people who live together)

d. E \_ \_ S (we hear with these)

e. T \_ \_ G \_ \_ (we taste with it)

## 5. Odd One Out

a. Eyes, Nose, Mango, Tongue

b. Apple, Milk, Chips, Rice

c. Father, Mother, Teacher, Sister

d. Walk, Run, Jump, Read

e. Cow, Goat, Book, Hen

## 6. Answer the Following Questions

- Name any two sense organs.
- How do family members help each other?
- Name two healthy foods.
- What does the tongue help us do?
- Who are the members of your family?

### Diagram


Draw and label any two sense organs.

### Circle the Correct Picture

- Circle the eye.



- Circle the food we get from animals.



- Circle the family. (Provide pictures of family, a group of toys, and a bus.)



### 4. Guess the Picture

- I help you to see. Who am I?
- I help you hear sounds. Who am I?
- I give you milk. I say 'Moo'. Who am I?
- I am your mother's mother. Who am I?
- I am sweet and red. Monkeys love me. Who am I?

## 5. Critical Thinking Questions

- What will happen if we do not help each other in the family?
- Why should we eat healthy food instead of junk food?
- If someone cannot see, how do you think they understand the world around them?
- How would your day be different if you could not hear anything?
- Imagine if your nose didn't work. How would that affect your life?

## EVS Worksheet 2 - Class 1

Chapters: My Body, Sense Organs, My Family, We Help Each Other, Food

### A. Multiple Choice Questions (MCQs)

1. We smell with our:

- a) Eyes      b) Nose      c) Ears      d) Hands

2. Which body part helps us to walk?

- a) Hands      b) Legs      c) Eyes      d) Nose

3. Which of these is a sense organ?

- a) Stomach      b) Ear      c) Hand      d) Leg

4. Who cooks food at home?

- a) Teacher      b) Doctor      c) Cook      d) Mother

5. A joint family has:

- a) Only parents      b) Many members  
c) One child      d) No relatives

### B. Fill in the Blanks

- We walk with our \_\_\_\_\_.
- We hear with our \_\_\_\_\_.
- We \_\_\_\_\_ with our tongue \_\_\_\_\_.
- Apple and mango are \_\_\_\_\_.
- A group of people living together is called a \_\_\_\_\_.

### C. True or False

- We see with our ears.
- A doctor teaches us.
- Vegetables are healthy food.
- We should help old people.



5. The nose helps us to smell.

#### D. Match the Following

Column A	Column B
1. Tongue	a) Smell
2. Eyes	b) Taste
3. Nose	c) Listen
4. Ears	d) See
5. Parents	e) Take care

#### E. Missing Letters

1. \_ A \_ I \_ Y (lives together)

2. \_ Y \_ (used to see)

3. \_ \_ A \_ S (used to hear)

4. \_ \_ \_ T (used to taste)

5. F \_ \_ D (we eat it)

#### F. Odd One Out

1. Nose, Eye, Ear, Chair → \_\_\_\_

2. Apple, Mango, Potato, Banana → \_

3. Leg, Hand, Spoon, Nose → \_

4. Father, Mother, Teacher, Sister → \_\_\_\_

5. Doctor, Nurse, Policeman, Mango → \_\_\_\_

#### G. Question and Answers

1. Name any two sense organs.

Ans: \_\_\_\_\_

2. What do we do with our legs?

Ans: \_\_\_\_\_

3. Who are your family members?

Ans: \_\_\_\_\_

4. Why should we help others?

Ans: \_\_\_\_\_

5. Name two healthy foods.

Ans: \_\_\_\_\_

## H. Diagram Section

1. Draw a boy and label its Body Parts.
2. Draw 2 food items you get from animals and plants

### ग्रीष्म कालीन हिंदी अभ्यास पहिका 1

- 1: Revise PT-1 Syllabus.
- 2: Do one page reading and writing daily.
- 3: Learn poem (पानी बरसा) page no-25.
- 4: पाँच वाक्य लिखिए-मेरा परिचय/गाय।
- 5: मात्राओं का चार्ट बनाए ए 3 शीट पर (reference page no 13 of Hindi grammar)

### अभ्यास पुस्तिका 1

(खंड क)

प्रश्न 1: नीचे दिए गए गद्यांश को पढ़कर प्रश्नों के सही उत्तर चुनिए।

गद्यांश :

जंगल में एक खरगोश रहता था। उसके चार मित्र थे—गाय, हिरण, घोड़ा और बकरी। पाँचों दोस्त मिल-जुलकर हँसी-खुशी से समय बिताते थे। एक दिन कुछ कुत्ते खरगोश के पीछे पड़ गए। खरगोश बहुत घबरा गया। वह अपने मित्रों में से सबसे पहले घोड़े के पास सहायता माँगने गया। वह घबराकर घोड़े से बोला, "मित्र, मुझे किसी तरह इन कुत्तों से बचाओ। ये तो मुझे मार ही डालेंगे।"

प्रश्न 1: जंगल में कौन रहता था?

क) खरगोश ( )    ख) हाथी ( )    ग) शेर ( )

प्रश्न 2: खरगोश के पीछे कौन पड़ा था?

क) कुत्ते ( )    ख) बिल्ली ( )    ग) बच्चे ( )

प्रश्न 3: खरगोश के कितने मित्र थे?


क) तीन ( )    ख) चार ( )    ग) पाँच ( )

(खंड ख)

प्रश्न 2: अपनी दिनचर्या पर निबंध ।


- क) \_\_\_\_\_.
- ख) \_\_\_\_\_.
- ग) \_\_\_\_\_.
- घ) \_\_\_\_\_.
- ङ) \_\_\_\_\_.

### प्रश्न 3: चित्र वर्णन



(खंड 'ग')

प्रश्न 4: व्यंजन से शुरू होने वाले चित्र पर रंग भरों।



प्रश्न 5:- अक्षर को जोड़कर दो अक्षर वाले शब्द बनाएं-

- 1) ज + ल =
- 2) का + म =
- 3) घ + र =
- 4) द + स =

(खंड घ)

प्रश्न 6: दिए गए शब्दों से वाक्य बनाएं :

- क) बादल -
- ख) नाव -

ग) जल -

घ) डाकिया -

6. प्रश्नों" के उत्तर लिखिए :

क) आकाश पर क्या छाया?

ख) झटपट क्या लाई?

ग) डाकिया किसका खत लाया?

ग्रीष्मकालीन हिंदी गृहकार्य अभ्यास पुस्तिका 2  
(खंड क)

प्रश्न 1:- गद्यांश पढ़कर सही विकल्प चुनो ।

बुधवार को सोहन का जन्मदिन है। वह अपने इस जन्मदिन पर 7 साल का हो जाएगा। वह दूसरी कक्षा में पढ़ता है। वह हर साल अपना जन्मदिन धूमधाम से मनाता है। वह अपने जन्मदिन पर घर को गुब्बारों और फूलों से सजाता है। वह शाम को केक काटता है। सब उसे जन्मदिन की बधाई के साथ सुंदर-सुंदर उपहार देते हैं। वह इस दिन बहुत खुश होता है।

प्रश्न 1: सोहन का जन्मदिन कब है?

क) बुधवार                      ख) मंगलवार

प्रश्न 2: सोहन अपने इस जन्मदिन पर कितने साल का हो जाएगा?

क) 7                              ख) 8

प्रश्न 3: सोहन कौन सी कक्षा में पढ़ता है?

क) तीसरी                      ख) दूसरी

प्रश्न 4: सोहन अपने जन्मदिन पर घर को किससे सजाता है?

क) कागज से                      ख) गुब्बारों और फूलों से

प्रश्न 5: 'रात' का विपरीत शब्द क्या है?

क) शाम                              ख) दिन

(खंड ख)

प्रश्न 2: आपने अपना ग्रीष्म अवकाश कैसे बिताया?

पाँच वाक्य लिखिए।

प्रश्न 3:- गद्यांश पढ़कर सही विकल्प चुनो ।

जंगल में एक तालाब है। तालाब में मछलियाँ तैर रही हैं। तालाब के किनारे एक मेंढक बैठा है। वही एक पेड़ है, जिस पर एक तोता बैठा है। पेड़ के नीचे हरी-हरी घास और कुछ फूलों के पौधे हैं। फूलों पर तितलियाँ बैठी हैं।

1. तालाब कहाँ था?  
(i) बगीचा में (ii) जंगल में
2. तालाब में कौन तैर रहा था?  
(i) मेंढक (ii) मछली
3. पेड़ पर कौन बैठा था?  
(i) तोता (ii) मोर
4. पेड़ के नीचे किसके पौधे थे?  
(i) फल (ii) फूल
5. फूलों पर कौन बैठा था?  
(i) तितली (ii) चिड़िया

(खंड ग)

प्रश्न 4: निम्नलिखित शब्दों के विलोम शब्द लिखिए -

- क) रोना -
- ख) सोना -
- ग) ऊँचा -
- घ) पतला -

प्रश्न 5: नाम वाले शब्दों पर गोला लगाएं।

1. राम घर जाता है।
2. राम स्कूल जाता है।
3. मैं दिल्ली में रहता हूँ।
4. शेर जंगल का राजा है।
5. मुझे आम पसंद है।

(खंड घ)

प्रश्न 3: दिए गए शब्दों से वाक्य बनाएं।

1. राजा
2. मिठाई:

3. छाता:

4. डाकिया:

**प्रश्न 6: दिए गए प्रश्नों के उत्तर लिखिए।**

1: डाकिए का क्या नाम था?

2: मिठाई कौन लाया?

3: साइकिल पर कौन आया?

4: झटपट क्या लाई?

### Computer Science Worksheet 1

Q1. Fill in the blanks:-

1) A computer is a \_\_\_\_\_

2) A computer work very \_\_\_\_\_

3) A Computer run on \_\_\_\_\_

4) Machine make our work \_\_\_\_\_

5) The \_\_\_\_\_ is the brain of computer

Q2 True or False :-

- 1) A computer gets tired ( )
- 2) A monitor shows picture and words ( )
- 3) Keyboard is used to draw pictures ( )
- 4) A computer work very slow ( )
- 5) CPU stand for central Processing Unit ( )

3. Missing letters:-

1. O \_\_\_ P \_\_\_ T \_\_\_ R (Hint:- smart machine)
2. M \_\_\_ N \_\_\_ T \_\_\_ R ( Hint :-it shows what we do )
3. E \_\_\_ B \_\_\_ A \_\_\_ D (Hint :- used to type )
4. M \_\_\_ U \_\_\_ E (Hint :- used to print and click)
5. C \_\_\_ U (Hint:- brain of the computer)

4. Multiple choice question (MCQs)

- 1) Which of the following is a machine?  
a) Cat      b) Computer    c) Tree
- 2) What help us to type letter and numbers?  
a) Mouse    b) keyboard    c) Monitor
- 3) Which part of Computer shows pictures?  
a) Cup      b) Monitor      c) Mouse
- 4) What does a computer need to work?  
a) Water    b) Fuel          c) Electricity

5. Answer the following questions

Q1. What is a computer?

A) \_\_\_\_\_

Q2. Name any two parts of computer?

A) \_\_\_\_\_

Q3. What is the use of computer?

A) \_\_\_\_\_

Q4. Draw parts of computer and I it.

A)\_\_\_\_\_

### Computer Science Worksheet 2

Q1 Fill in the blanks with given hint

(Tickets Patients Music Draw Colour Sums )

a) A Computer is used to and \_pictures.

b) We can solve\_\_\_on a computer .

c) We can listen to \_\_\_\_on a computer.

d) Computer are used to store information of \_in hospital

Q2. Read the word and circle on the correct picture

Desktop



Laptop



Tablet



Q3. Choose the words and fill in the correct boxes



Q4. Rearrange the jumbled letters to form a word

- a) O U C T M P R E :-
- b) A C M I H E N :-
- c) A L P O T P :-
- d) S E D K P T O :-

### General Knowledge Worksheet

Topics: Birds, Fruits, Vegetables, Flowers, Animal Homes, Animal Babies, Body Parts

A. Multiple Choice Questions (MCQs):

1. Which of the following birds can swim?

- a) Crow
- b) Parrot
- c) Duck
- d) Sparrow

2. Which fruit is called the "king of fruits"?

- a) Banana
- b) Mango
- c) Apple
- d) Orange

3. A lion lives in a

- a) Nest
- b) Den
- c) Stable
- d) Kennel

4. Which vegetable is orange in color and helps improve eyesight?

- a) Potato
- b) Carrot
- c) Brinjal
- d) Cabbage



5. A baby dog is called a:

- a) Chick      b) Cub      c) Puppy      d) Kitten

B. One Word Questions:

- a) Name a bird that talks. \_\_\_\_  
b) Name a fruit that is red and has tiny seeds outside. \_\_\_\_  
c) Name the baby of a cow. \_\_\_\_  
d) Which part of your body helps you to smell? \_\_\_\_  
e) Name the home of a bird. \_

C. Choose One:

- a) (Tomato / Rose) is a vegetable.  
b) (Eagle / Elephant) can fly.  
c) We smell with our (ear / nose).  
d) (Nest / Burrow) is the home of a rabbit.  
e) A (cub / chick) is the baby of a bird.

D. Fill in the Blanks:

- a) The \_\_\_\_\_ is the national bird of India.  
b) We see with our \_\_\_\_\_.  
c) A cow lives in a \_\_\_\_\_.  
d) A \_\_\_\_\_ is a fruit with thorns on its outside.  
e) A \_\_\_\_\_ is a green vegetable.

E. True or False:

- a) An owl sleeps at night. (True / False)  
b) Mango is a vegetable. (True / False)  
c) We hear with our nose. (True / False)  
d) A hen lives in a coop. (True / False)  
e) A kitten is a baby cat. (True / False)

F. Tick the Right Action:

- a) [ ] Pluck flowers from a garden  
b) [ ] Water the plants  
c) [ ] Throw fruits on the ground  
d) [ ] Eat fresh vegetables



### G. Missing Letters:

- a) B \_ R \_ (A flying animal)
- b) A \_ P \_ E (A red fruit)
- c) F \_ \_ E R (Used for decoration)
- d) H \_ \_ R (Grows on your head)
- e) R \_ \_ B \_ T (A hopping animal)

### H. Question & Answers:

1. Q: Where does a bird live?

A: \_\_\_\_\_

2. Q: Which fruit is yellow and long?

A: \_\_\_\_\_

3. Q: What do we do with our hands?

A: \_\_\_\_\_

4. Q: Name a green vegetable.

A: \_\_\_\_\_

5. Q: What is the baby of a lion called? A:

A: \_\_\_\_\_

### I. Critical Thinking Questions:

1. Why do birds have wings?

A: \_\_\_\_\_

2. What would happen if we don't eat vegetables?

A: \_\_\_\_\_

3. Which body part helps you write?

A: \_\_\_\_\_

4. Why should we take care of baby animals?

A: \_\_\_\_\_

5. Can we grow flowers in our house? Why or why not?

A: \_\_\_\_\_

### J. Current Affairs:

1. Who is the current Prime Minister of India?

A: \_\_\_\_\_



2. Which bird is featured on Indian currency?

A: \_\_\_\_\_

3. Which vegetable has recently been sent to space for experiments?

A: \_\_\_\_\_

4. Name a fruit festival celebrated in India.

A: \_\_\_\_\_

5. Which city is famous for flower shows in India?

A: \_\_\_\_\_



## GENERAL KNOWLEDGE WORKSHEET 2

Topics: Birds, Fruits, Vegetables, Flowers, Animal Homes, Animal Babies, Body Parts

### A. Multiple Choice Questions (MCQs):

1. Which bird cannot fly?

- a) Crow      b) Parrot      c) Ostrich      d) Pigeon

2. Which fruit is yellow from outside and white from inside?

- a) Mango      b) Banana      c) Apple      d) Guava

3. Which flower is called the 'Queen of Flowers'?

- a) Lotus      b) Rose      c) Sunflower      d) Lily

4. Where does a lion live?

- a) Nest      b) Stable      c) Den      d) Hole

5. What is the baby of a dog called?

- a) Calf      b) Chick      c) Puppy      d) Foal

### B. One Word Questions:

1. Name a fruit that has seeds outside.

Answer: \_\_\_\_\_

2. Name the home of a bee.

Answer: \_\_\_\_\_

3. What is the baby of a cat called?

Answer: \_\_\_\_\_

4. Name a red vegetable.

Answer: \_\_\_\_\_

5. Which part of your body helps you smell?

Answer: \_\_\_\_\_

### C. Choose the Correct Option:

1. Which is a vegetable?

- a) Rose      b) Carrot      c) Banana

2. Which bird is green and can talk?

- a) Sparrow      b) Parrot      c) Peacock

3. Which body part helps you walk?



a) Hands

b) Ears

c) Legs

D. Fill in the Blanks:

1. A \_\_\_\_\_ lives in a coop.
2. The baby of a cow is called a \_\_\_\_\_.
3. We smell with our \_\_\_\_\_.
4. \_\_\_\_\_ is the national flower of India.
5. The \_\_\_\_\_ is a big bird that dances in the rain.

E. True or False:

1. Mango is a vegetable. - \_\_\_\_
2. Owl sleeps during the day. - \_\_\_\_
3. A rabbit lives in a hole. - \_\_\_\_
4. We hear with our eyes. - \_\_\_\_
5. Sunflower turns towards the sun. - \_\_\_\_

F. Tick the Right Action (Put ✓ or ✗):

1. Touching hot things - [ ]
2. Washing hands before eating - [ ]
3. Plucking flowers from the garden - [ ]
4. Eating fresh fruits and vegetables - [ ]
5. Playing with animal babies - [ ]

G. Missing Letters:

1. P \_ \_ R O T
2. A \_ \_ L E
3. S \_ \_ N F L \_ \_ \_ R
4. B \_ \_ N A
5. E \_ \_ S (Part of body)

H. Question and Answer:

1. Q: Where does a bird live?  
A: \_\_\_\_\_
2. Q: What is the name of a baby lion?  
A: \_\_\_\_\_
3. Q: Name any two body parts.  
A: \_\_\_\_\_



4. Q: Name two fruits you like to eat.

A: \_\_\_\_\_

I. Critical Thinking Questions:

1. If you find a baby bird that has fallen from its nest, what will you do?

A: \_\_\_\_\_

2. Why should we not pluck too many flowers?

A: \_\_\_\_\_

3. What would happen if we eat only junk food and no fruits/vegetables?

A: \_\_\_\_\_

J. Current Affairs (May 2025):

1. Who is the President of India in 2025?

A: \_\_\_\_\_

2. Name one Indian bird sanctuary.

A: \_\_\_\_\_

3. What is the color of the traffic light that means 'Go'?

A: \_\_\_\_\_