

FLORENCE INTERNATIONAL SCHOOL

CLASS-III

2020-21



The following tips would help your child spend these holidays in a learning way.

- ❖ **INCULCATE HEALTHY HABITS** i.e. getting early in the morning, brushing teeth twice a day, washing hands, drinking lots of water and eating lots of fruits.
- ❖ **SUPPORT MORAL VALUES** – Wishing everyone (Good Morning) helping parents and grandparents in their regular work, saying prayer in the morning and night etc. Helping needy by giving away spare toys and clothes.
- ❖ **NURTURE THE NATURE** - Plant a sapling and taking care of it, feeding the birds with water and seeds. Keep your surrounding clean and avoid using plastic poly bags.
- ❖ **DEVELOP LEARNING SKILLS** – Converse small sentences in English, practice , listen good music and move/dance on the rhythm, practice writing (English & Hindi) daily.
- ❖ **PERSONALITY DEVELOPMENT** – Watch less television, save food and water, bath daily and wear neat and clean clothes, don't bite your nails, use hanky/napkin to wipe nose, sweat and hands, don't spit around and speak politely.
- ❖ **SKILL DEVELOPMENT** - Practice the following for Independent learning.
 - a) **Speaking Skill** : Encourage your child to learn the speak in English .

b) **Self-Help Skill** :

- # Wash your own cloths
- # Keep things in proper places.

- # Clean your workspace.
- # Water the plants.

Arrange the books and toys back

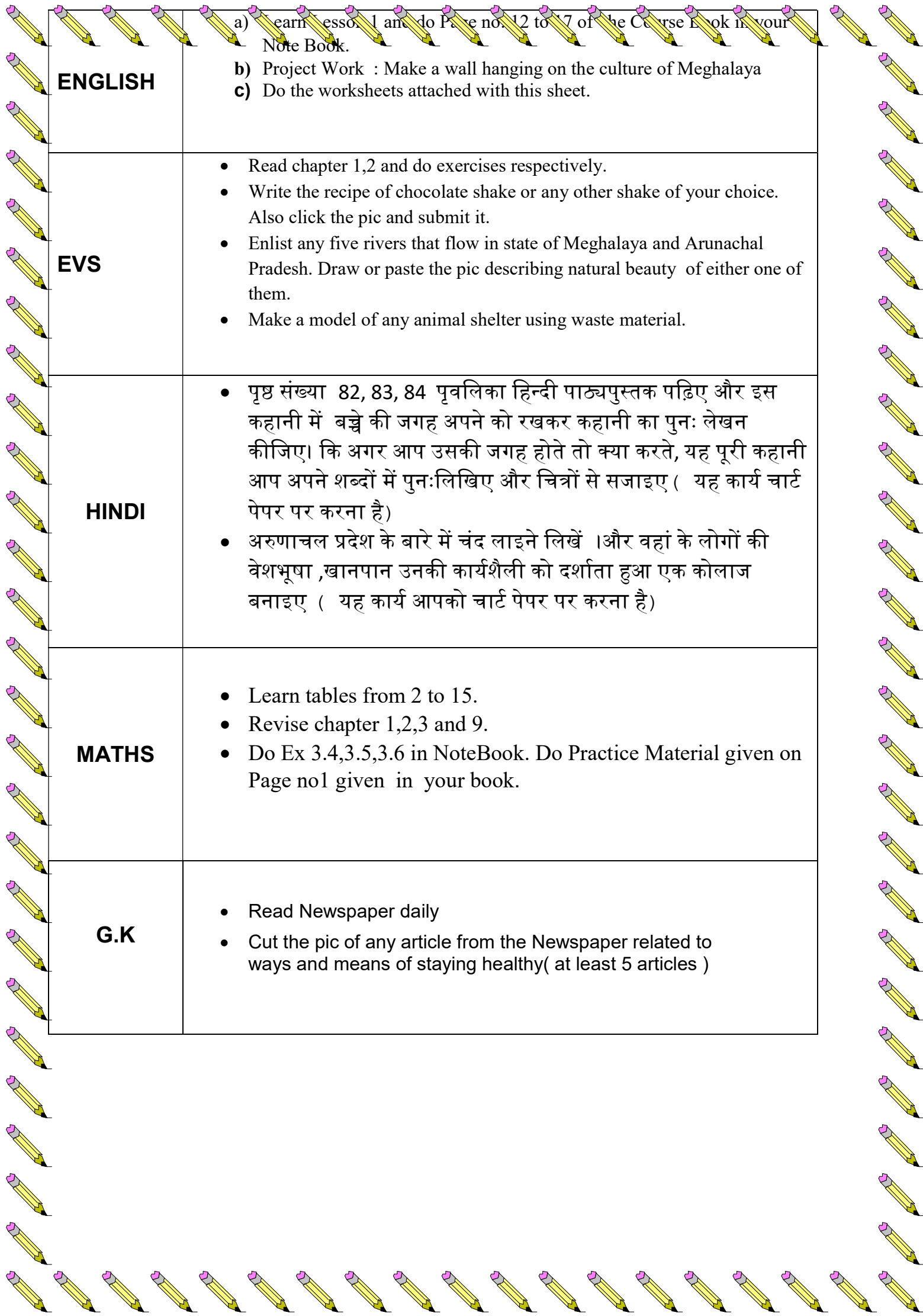
#Laying the table for lunch / dinner

EXPERIENTIAL LEARNING

Make a Table Mat .

Laminate and label it properly so that child can use during lunch period in class.

ACADEMIC LEARNING



ENGLISH	<p>a) Learn Lesson 1 and do Page no. 12 to 17 of the Course Book in your Note Book.</p> <p>b) Project Work : Make a wall hanging on the culture of Meghalaya</p> <p>c) Do the worksheets attached with this sheet.</p>
EVS	<ul style="list-style-type: none">• Read chapter 1,2 and do exercises respectively.• Write the recipe of chocolate shake or any other shake of your choice. Also click the pic and submit it.• Enlist any five rivers that flow in state of Meghalaya and Arunachal Pradesh. Draw or paste the pic describing natural beauty of either one of them.• Make a model of any animal shelter using waste material.
HINDI	<ul style="list-style-type: none">• पृष्ठ संख्या 82, 83, 84 पृवलिा हिन्दी पाठ्यपुस्तक पढ़िए और इस कहानी में बच्चे की जगह अपने को रखकर कहानी का पुनः लेखन कीजिए। कि अगर आप उसकी जगह होते तो क्या करते, यह पूरी कहानी आप अपने शब्दों में पुनःलिखिए और चित्रों से सजाइए (यह कार्य चार्ट पेपर पर करना है)• अरुणाचल प्रदेश के बारे में चंद लाइने लिखें ।और वहां के लोगों की वेशभूषा ,खानपान उनकी कार्यशैली को दर्शाता हुआ एक कोलाज बनाइए (यह कार्य आपको चार्ट पेपर पर करना है)
MATHS	<ul style="list-style-type: none">• Learn tables from 2 to 15.• Revise chapter 1,2,3 and 9.• Do Ex 3.4,3.5,3.6 in NoteBook. Do Practice Material given on Page no1 given in your book.
G.K	<ul style="list-style-type: none">• Read Newspaper daily• Cut the pic of any article from the Newspaper related to ways and means of staying healthy(at least 5 articles)

MATHS WORKSHEET

Q.1. Read the given data carefully and solve the questions given below:

Monument	Height (in cm)
Qutub Minar	7300
India Gate	4200
Lotus temple	3400
Gol gumbaj	5100
Hava Mahal	1500

1. Arrange the above data in ascending order
2. Arrange the above data in descending order
3. Find the greatest number
4. Write the expanded form of all the numbers
5. Find the sum of the heights of any two monuments
6. Find the smallest number

Q.2. Make cutouts of Geometrical shapes (Square, Rectangle, Square, Triangle, Circle).

Activity 1: Make a card for your father on the occasion of father's day with the help of shapes which we have studied so far, depicting the art form of Meghalaya (Warli art).



Activity 2: Prepare a chart on roman numbers with match sticks.

Roman Numerals:-

Students will cut 1cm x1cm Square papers (4 in number) and mark them with letters I, X, V, L and color them as follows:

Yellow color for all 'I' Papers, Red Color for all 'X' Papers, Blue color for all 'V' papers, Green color for all 'L' papers. They will note down age of each family members and paste the colored papers representing age in roman numerals as follows:

Sr No	Relation	Hindu Arabic Numerals	Roman Numerals
1.	Mother	32	XXXII

ENGLISH

Worksheet-1

Q1. Complete the web chart by filling in appropriately from the help box:

Ice cream:

Cold Drinks: Aam

Panna, _____

_____, _____

_____, _____

Fruits: Peaches,

Summer
Time

Main course:

Curd, _____

Salads:

Cucumber, _____

Help box: Kulfi, Lemonade, Mangoes,
Pulses, Milk, Shake, Juices, Rice,
Tomato, Cabbage, Plums, Chapati,
Vegetables, Sprouts



Worksheet-2

Articles

Q1. Fill in the blanks with suitable articles:

- a) I have _____ bag and _____ rain coat.
- b) Please give me _____ glass of water.
- c) This is _____ ice cube. Put _____ ice cube in my lemonade.
- d) My mother reads _____ Navbharat Times daily in _____ morning.
- e) My dog's name is Google. It has _____ pup. _____ pup is one month old.
- f) _____ milk in _____ glass is warm.
- g) _____ Sun rises in _____ east and sets in _____ west.
- h) Mohan is _____ honest man. He works at this shop for _____ hour daily in _____ evening.
- i) _____ unicorn is _____ imaginary animal.
- j) _____ umbrella is _____ useful thing.
- k) We have _____ garden. There is _____ guava tree and _____ apple tree in _____ garden.
- l) Look at _____ black board.
- m) _____ Moon is _____ natural satellite of _____ Earth.
- n) Close _____ window.
- o) There is _____ window in my room.

Worksheet-3
(Nouns)

Q1. Circle the nouns and write it in proper place:

Nouns	Proper Nouns	Common Nouns
Sri Lanka is a small country.		
Kaveri is a long river.		
Patna is the capital of Bihar.		
Ms Alka is our librarian.		
Virat Kohli is a famous cricketer.		
Subhash Chandra Bose was a great freedom fighter.		
Yagya is a smart boy.		
The Guru Granth Sahib is a holy book.		
Amul is a famous brand of butter.		
Sapna wrote a poem for me.		

Q2. Fill in the blanks with collective noun:

- A _____ of musicians performed well.
- A _____ of ships was sailing in the sea.
- Look at that _____ of cubs.
- Hurray! Our _____ won the match.
- I bought a _____ of flowers for the guests.
- Sneha is wearing a nice _____ of shoes.
- He was setting the pictures in an _____.
- The _____ of puppies was hungry.



SUBJECT- EVS

Q1. Tick the correct option.

- I. I am found inside the fruit. I am
- a) seed
 - b) flower
 - c) leaf
- II. I am a herb. I am used to flavor food.
- a) paper
 - b) rubber
 - c) coriander
- III. I am used to make sugar. I am
- a) banana
 - b) sugarcane
 - c) cardamom
- IV. I am a spice. I am used to cure toothache.
- a) cinnamon
 - b) clove
 - c) black pepper
- V. I am a dry fruit. I have very hard shell.
- a) walnut
 - b) raisin
 - c) gum
- VI. I am needed by human beings and animals to breathe
- a) carbon dioxide
 - b) oxygen
 - c) nitrogen
- VII. Paper is made from my pulp. I am
- a) bamboo tree
 - b) mango tree
 - c) neem tree
- VIII. We make hair dyes from this
- a) eucalyptus
 - b) shisham
 - c) henna
- IX. We get gum from this plant
- a) indigo
 - b) acacia tree
 - c) tulsi
- X. I am added to the soil to make plants grow well
- a) compost
 - b) sand
 - c) pebbles

Q2. Identify the name of pictures & write the type of plant.



Q3. Complete the crossword puzzle.


Down

- 1 .I have weak stem .I need support of other plants, sticks or walls to grow.
2. I carry water to the leaves.
3. I fix the plant to the soil.
4. I am the kitchen of the plant.
5. I am the national tree of India.

Across

1. I am sweet smelling. I am used to make perfumes, soaps, and bouquets.
2. My leaves are bitter. I am used to make medicines.
3. I have weak stem. I grow along the ground.
4. My life is very short. I am used to flavour food.

Watermelon, Neem, Grapevine, Roots, Stem, Banyan, Rose, Leaf , Mint




Q4. a) Name the four food items that are eaten raw.

b) Name the four food items that are eaten cooked.

Q 5. Label the parts of bird's body.

Part of a bird



Q6. Write the name of birds in correct column:

**Hen, Ostrich, Sparrow, Crow, Eagle, Duck, Penguin, Cock, Vulture,
Pigeon, Kiwi**

- I. Waterbirds: _____**
- II. Birds that do not fly: _____**
- III. Birds that fly at great height: _____**
- IV. A bird that fly at low height: _____**
- V. Birds that fly over great distance: _____**
- VI. Birds that fly over short distance: _____**

Q4. Match the columns:

- | | |
|-----------------------|-------------------------------|
| a) eagle | a waterbird |
| b) geese | hooked beak |
| c) pigeon | the smallest bird |
| d) hummingbird | short beak |
| e) woodpecker | curved beak |
| f) parrot | sharp and pointed beak |

***Please note that all the H.W has to be done neatly. Grades/ Marks would be awarded for the same in all the subjects.**

