



FLORENCE INTERNATIONAL SCHOOL
CLASS- III
WORKSHEET NO: 13
MATHS

NAME: _____

DATE: 16/04/2020

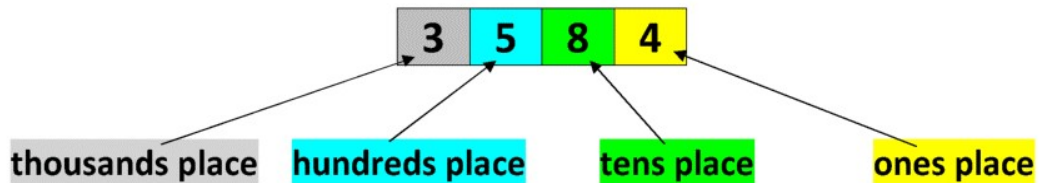
Please follow the link: https://www.youtube.com/watch?v=L2kNtEr_Yng&feature=youtu.be

CONCEPT:

Place value of large numbers:

3584 is
read as
three
thousand
and five
hundred
eighty -
four

A digit's place value tells us how much each digit is worth.

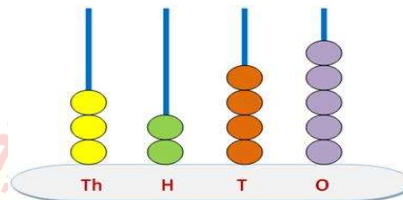


Examp

les showing 4 digits number on spike abacus:

i)

3 2 4 5



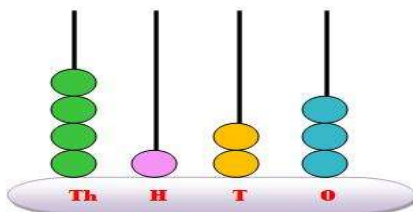
Three thousand two hundred forty five

In **ones** or **unit** place there are five beads that **represents 5**; in tens place there are four beads that **represents 4**; in hundreds place there are two beads that **represents 2** and in **thousands** place there are three beads that **represents 3**.

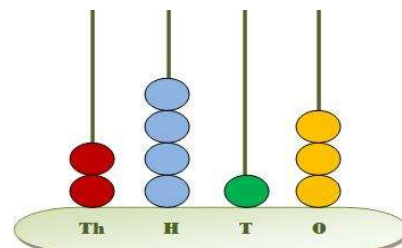
EXERCISE

Q1. Count the beads and write the numbers-

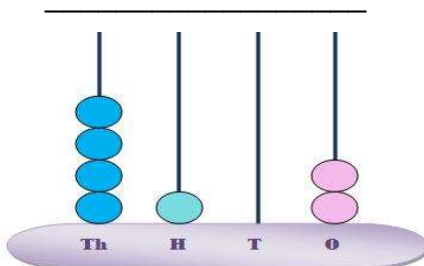
a)



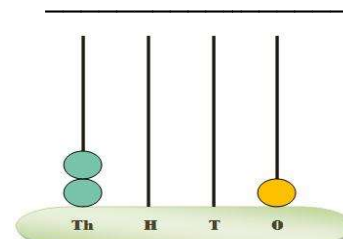
b)



c)



d)



Q2. Write the numbers-

a. Four thousand four hundred fifty-seven= _____

b. Six thousand seventeen = _____

c. Two thousand nine hundred two = _____

d. Three thousand twenty six = _____.

Q3. Write the number names –

a. 2314 = _____

b. 9078 = _____.

c. 2356 = _____

d . 4598 = _____.

